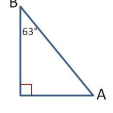
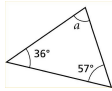

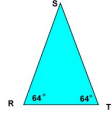
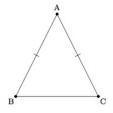
 <p>Angle at C =</p>		<p>Isosceles triangle 44° 68° and ?</p>	
---	--	---	--


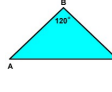
 <p>Missing angle =</p>	
--	--

<p>Equilateral triangle 60° 60° and ?</p>		 <p>Missing angle =</p>	
---	--	--	--

 <p>Name the shape</p>	
---	--

<p>Scalene triangle 47° 43° and ?</p>		 <p>Missing angle =</p>	
---	--	--	--

 <p>This shape is an...</p>	
--	--

<p>Name the shape</p> 		 <p>Angle at A =</p>	
---	--	---	--